

GARFIELD NURSERY AND PRIMARY SCHOOLS
P.5. ENGLISH REVISION WORK TWO
(ACTIVITY FOUR) 2020

SECTION A

Use the correct form of the word in the brackets to complete the sentences.

1. When my vehicle..... down, I took it to the garage for repair. (break)
2. Teachers..... meet in the afternoon. (usual)
3. The..... were in the last week of term one. (elect)
4. Katende was the in the hundred metre race. (nine)
5. Our mother..... to Cairo next week. (fly)
6. Peter gave me wrong..... about his sister. (inform)
7. Your cartoons are not as..... as mine. (interest)
8. Our classteacher always encourages to work hard. (We)
9. The carpenter did not take the correct..... of his dining table. (measure)
10. The central region is than the northern region (hot)

In questions 11 – 15, fill in the blank space with a suitable word

11. The teacher told the timekeeper to the bell.
12. you drive carefully, you will cause an accident.
13. A teacher is as important..... a head of school.
14. Bush burning can lead to soil.....
15. The article appeared in the Sunday Monitor magazine was saddening

For questions 16 – 18, rewrite the sentences giving one word for the group of the underlined words.

16. The farmer is cleaning the house for dogs.
17. My uncle is a man who repairs vehicles.
18. I stayed in Kenya for a period of two weeks.

For questions 19 and 20, use the word given below to construct meaningful sentences to show that you know their meaning

19. Shut

20. Shirt

For questions 21 – 23, rewrite the sentences giving the opposites of the underlined words

21. All the pupils were asleep when the bell rang.

22. Our nephew has just joined university

23. Our gate was left closed throughout the night

In questions 24 and 25, arrange the words below to form meaningful sentences

24. New Vision My is the uncle editor newspaper the of.

25. is what a Samantha beautiful lady!

For questions 26 and 27, arrange the words in alphabetical order

26. mirror, seat, brochure, cartoons

27. conductor, carry, convey, cart

In each of the questions 28 – 30, give the plural form of the given words

28. library.....

29. equipment

30. mother – in – law

SUB – SECTION II

In questions 31 – 50, rewrite the following sentences as instructed in brackets.

31. The stamp got lost. It was for the head teacher. (Join using.....which.....)

32. Tosoby works at the garage. He wants to get school fees for term two. (Rewrite the sentences using ...in order.....)

33. The journalist was smart. The cartoonist was smart. (Join the sentences beginning: Both.....)

34. There is some grease in the tin. (Rewrite the sentences using.....any.....)

35. Teachers will eat chicken during lunch. Teachers will eat beef during lunch. (Join using.....either.....or.....)

36. The lorry was very old. It could not climb the hill. (Rewrite using.....too.....to.....)

37. It is a good practice to greet people in our community. (Begin: Greeting.....)

38. Don't forget to close the fuel tank. (Begin: Remember.....)

39. My car was producing a lot of smoke. I took it to the garage for checking. (Join the sentences using..... because.....)
40. Pedestrians are not allowed to cross busy roads hurriedly. (use:...mustn't....)
41. I came late to school. I was not punished. (Begin: Although.....)
42. Mark is not as wealthy as Mike. (Rewrite using.....wealthier.....)
43. If you don't have a ticket, you will not enter the bus. (Begin: Unless.....)
44. All the P.5 girls are beautiful. (Rewrite the sentence beginning; None.....)
45. Mr. Mutwe is the owner of this garage. (Rewrite the sentences using.....belongs.....)
46. The break down vehicle is very strong. It can pull a trailer without any help. (Rewrite the sentences using.....enough.....)
47. Moses is not a journalist. Pamela is not a journalist. (Begin: Neither.....)
48. Darius goes to the dentist when he feels toothache. (Rewrite the sentences beginning: Whenever.....)
49. Here is the farmer. His goat was stolen last night. (Rewrite the sentences using.....whose.....)
50. One man's meat..... (Complete the saying sensibly) **SECTION B**

51. Read the passage carefully and answer the questions in full sentences

At the beginning of term one this year, the teacher of English, Ms Amito Diana told us that we were going to learn about vehicle repair and maintenance. I felt happy to hear this because I had not known any part of a vehicle or the tools used to repair vehicles.

When we started learning this topic, she taught us that the engine gives a vehicle power to move, a driver switches on the blinker to signal that he wants to turn and that a passenger fastens himself with a seat belt to avoid being thrown out of his seat in case the vehicle knocks. She also talked about other parts of vehicle.

One day, the teacher asked me, "Pamela, have you ever visited a garage?" "No madam, "I replied." The teacher promised to take the whole class to a garage the following week. When the day reached she took us to Kapere's garage which was just a kilometre away from our school.

We reached the garage at ten o'clock in the morning. We found a mechanic called Tom, who showed us the different tools he used in repairing vehicles, one of the tools was a spanner. He said it was used for loosening and tightening nuts and bolts. He also showed us a lot more tools and put them back in his toolbox

QUESTIONS

1. In which term did the pupils learn vehicle repair and maintenance?
 2. Who taught this class about vehicle repair?
 3. According to the story, which part of the vehicle gives it power to move?
 4. What should a passenger do to be safe in the seat?
 5. To whose garage did the class go?
 6. At what time did the class reach the garage?
 7. Suggest a suitable title to the passage.
 8. Why did the writer feel happy when he heard about learning the topic?
 9. Give a word or group of words with the same meaning as the underlined words.
 - a. Started.....
 - b. The following.....
52. Read the poem below and then answer in full sentences the questions that follow

Busy bees busy bees
From flowers to flowers they move
Pollinating them as they collect nectar
For making honey

Busy bees busy bees
Worker bees while cleaning the hive
Feeding the queen
And producing honey and wax

Busy bees busy bees
The drone fertilizes the queen
As she lays the eggs
And worker bees protect her

Busy bees busy bees
Social insects they are
For they work together as a team
And together as a team they live!

QUESTIONS

1. What is the poem about?
 2. What is nectar used for according to stanza one?
 3. What work do the bees do in relation to hygiene?
 4. Which bees feed the queen?
 5. Apart from feeding the queen, what else do worker bees do according to stanza two?
 6. Which bees fertilize the queen?
 7. What type of insects are bees?
 8. What shows that bees are social insects?
 9. How many stanzas has the poem?
 10. Suggest a suitable title for the poem.
53. The sentences below are in wrong order. Arrange them to form a meaningful story
- a. But the modern means include radio, television and print media.
 - b. Another reason is that they give a variety of information
 - c. These are the traditional ways and modern ways
 - d. People in my place like reading the above newspapers because they
 - e. An example of print media is a newspaper
 - f. Communication is the transfer of information from one person to another
 - g. So, encourage all those who can read to buy and read newspapers.
 - h. The traditional ways include use of drums, horns, whistles, flutes etc
 - i. Newspapers have different names such as Bukedde, Orumuri, New vision and The Observer.
 - j. There are two ways of communication

54. Study the receipt below and answer the questions that follow in full sentences.

BUY MORE SUPERMARKET

ITEM	QUANTITY	PRICE	TOTAL
Loaf of bread	1		Sh. 3,500
Pen	2	Sh. 500	Sh. 1,000
	Amount paid		Sh. 5,000
	Change		Sh. 500

QUESTIONS

- a. Who bought the above items?
- b. How much was a loaf of bread?
- c. How many loaves of bread did Edwin buy?
- d. How many pens did he buy?
- e. How much did Edwin spend altogether?
- f. How many items did Edwin buy?
- g. Where did Edwin buy the items above?
- h. How much money did Edwin give to the cashier?
- i. How much did the cashier give back to Edwin?
- j. What name is given to the money that Edwin received from the cashier?

55. Use the words given in the table below to complete the passage about “Travel safety tips”

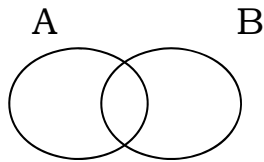
Uganda is a Country, but when you are..... On the road, please follow these rules if you are travelling on a motorcycle, you should wear a..... Do not travel..... in the night on motorcycles. If you are to use a, you should know the time of the bus. Arrive at the bus..... in time. Should also know the you are required to pay, pay your fare to the..... who will give you a place to sit.

Helmet, bus, conductor, travelling, ticket, late, departure, fare, station, peaceful
--

GARFIELD NURSERY AND PRIMARY SCHOOL
P.5 MATHEMATICS REVISION WORK TWO
ACTIVITY FOUR 2020
SECTION A

1. Add: sh 9642 + sh 350.

2. Shade set B only on the Venn diagram below.



3. Given the numeral 749, work out the sum of the value of 7 and 9.

4. Simplify $3\frac{1}{5} + 1\frac{3}{5}$.

5. Change 321_{five} to decimal base.

11. Find the expanded number

$$\begin{array}{r} (2 \times 10^3) + (4 \times 10^2) + (5 \times 10^1) \\ + \\ (3 \times 10^0) \end{array}$$

12. Sarah, Stella, Sandra and Stacy shared 780 apples equally. How many apples did each girl get?

6. A plate costs sh. 900. Find the cost of 12 similar plates.

7. Find the next number in the sequence 10, 7, 9, 6, 8,

8. 12 months make one year. How many years are in 36 months?

9. Construct a right angle in the below

10. Find the place value of the underlined digit
92036

13. Arrange $\frac{2}{5}$, $\frac{1}{5}$, $\frac{3}{5}$, $\frac{4}{5}$ from the biggest to the smallest.

14. Find the LCM of 12 and 18.

15. Peter was given Eighty six thousand three hundred two shirts to sale. Write the number of shirts in figures.

16. Express $7\frac{1}{2}$ as a mixed number.

17. Work out: $4 - 9 + 8$

18. Find the missing number in the box $2 = \boxed{} =$

20. Round off 7,830 to nearest hundreds.

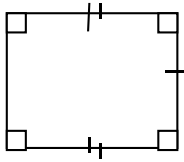
3

9

19. Jane is 36 years old. Write her age in Roman numerals.

Section B:

21.



Using the figure below to answer the questions that follow.

6cm

a) Name the figure above.

b) Work out the distance around the figure.

c) Find the area of the figure.

22. Study the shopping list below and use it to answer questions that follow.

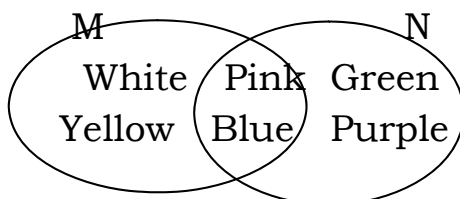
ITEMS	PRICE
Sugar	sh. 2500 per kg.
Mineral Water	sh. 1000 each bottle sh. 500
Onions	a tin sh. 2000
Bar of soap	per bar

a) How much can one pay for 2kg of sugar and 1 tin of onion altogether.

b) How much more does a bar of soap costs than a bottle of mineral water.

c) Annet went for shopping with sh. 9000. She bought each of the items shown on the table. How much did she remain with?

23. Use the Venn diagram below to answer the questions that follow.



Orange

a) List down the elements of set M

(1mark)

b) Find $n(M \cap N)$

(2marks)

c) Write the members of $(N - M)$

(1mark)

24. a) What is $\frac{1}{2}$ of 10?

(2marks)

b) Express $4\frac{1}{3}$ as an improper fraction.

(2marks)

c) Charles ate $\frac{3}{5}$ of a sugarcane on Monday and $\frac{1}{5}$ of the sugarcane on Tuesday. What fraction of the sugarcane did he remain with? (2marks)

25. a) Garfield schools have made XX years in the Education service. Write the years in Hindu Arabic numerals.

b) What number has been expanded to get $(7 \times 1000) + (6 \times 100) + (2 \times 10) + (5 \times 1)$ (2marks)

26. Work out the following:

a)

$$\begin{array}{r} 140_{\text{five}} \\ + 44_{\text{five}} \\ \hline \end{array}$$

b)

$$\begin{array}{r} 321_{\text{five}} \\ - 143_{\text{five}} \\ \hline \end{array}$$

27. If $n = 2$ and $r = 6$ Find.

a) $n + r$

b) $r \times n$

c) $\frac{n + r}{n}$

28. a) Draw a clock face and show 30minutes past 10 o'clock. (2marks)

b) Change $4\frac{2}{3}$ hrs to minutes. (2marks)

Add: Weeks Days (2marks)

14 5

+3 6

29. Use <, > or = to complete the statement.

a) 12 months _____ 1 year.

b) 602 _____ 206

c) (5 x 0) _____ (5 + 0)

d) $\frac{2}{5}$ _____ $\frac{5}{5}$ (1mark each)

30. a) Using a pair of compasses, construct a rectangle WXYZ where WX = 6.5cm and XY = 3cm

b) Calculate the total distance round the figure.

31. Agnes scored the following marks in her end of term one examinations.

Subject	Maths	Science	Music	French
Marks	78	96	80	66

a) What was Agnes's highest score? (1mark)

b) In which subject did Agnes score the lowest mark? (1 mark)

c) How many more marks did Agnes score in music than mathematics? (2 mks)

d) Work out Agnes's total marks. (2 marks)

32. Work out the following using a number line.

a) $3 + 4 =$ (2 marks)

b) $9 - 5 =$ (2 marks)

c) $2 \times 3 =$ (2 marks)

**GARFIELD NURSERY AND
PRIMARY SCHOOLS
P.5. R.E REVISION WORK TWO
(ACTIVITY FOUR) 2020
SECTION A**

1. Either: Who was the first martyr in the Bible? Or: Who was the first Martyr in Islam?
2. Either: How was river Jordan important to Jesus?
Or: How is the cave of Hira important to Moslems?
3. Either: Why was Daniel thrown to the den of lions?
Or: Why did Prophet Muhammad migrate from Mecca to Medina?
4. Either: What event do Christians remember on Palm Sunday.
Or: What is Saum

5. Either: How was Joseph related to Jesus Christ?
Or: How was Khadijah related to Prophet Muhammad?
6. Either: What did Jesus promise to send to his apostles?
Or: What did Allah leave with the Moslem community?
7. Either: Why do Christians remember the town of Bethlehem in Judaea?_ Or:
Why do Moslems visit the city of Mecca?
8. Either: Identify any one prophet in the Bible who foretold the coming of Jesus.
Or: Identify the Prophet in Islam who is known for deliverance.
9. Either: State one way God communicates to His people.
Or: State one way Allah Communicate to His people.
10. Either: Whom did God create as a companion to Adam?
Or: Create to be Adam's companion?_
11. Either: Why was Jesus Christ taken to Golgotha on Good Friday? Or: Why was
Prophet Muhammad taken to heaven?
12. Either: How did Jesus make the family of Lazarus happy? Or: How is the Qur'an
important to our lives?
13. Either: What does Jesus teach us about our enemies?
Or: What does the Qur'an teach us about our enemies?
14. Either: On which day do Christians remember Jesus resurrection?
Or: On which day do Moslems celebrate Idd-el-fitr?
15. Either: Who baptized Jesus?

- Or: Who was the Prophet Muhammad's foster mother?
16. Either: Which commandment encourages children to honour their parents?
- Or: Which pillar of Islam teaches us to share?
- Either: Why do Christians celebrate 3rd June every year?
- Or: Why do Moslems remember Eid-el-Adhuha?

18. Either: State one way we can care for people with HIV/AIDS?
- Or: State one way how we can care for people with disabilities?
- Either: What did God create on the last day?
- Or: What did Allah Create on the last day?

19. Either: Which apostle replaced Judas Iscariot?
- Or: Which follower of the Prophet succeeded him?

20. Either: a) Name the Holy book for Christians.

SECTION B

21. Either: a) What are parables?
- b) Why did Jesus use parables in his teaching?
- c) Name any two lessons you learn from the parable of the prodigal son?

Or: a) What is a Surat?

b) Mention any three Surat of the Holy Qur'an.

23. Either: a) What is a church?

b) State two ways of worshipping God.

c) Why was Jesus angry with the people who were selling good in God's Temple.

Or: a) What is a Mosque.

b) Identify any three things that can show you the location of a Mosque.

-
24. Either: **Match the following correctly.**

A
Qur'an
Injil
Taurat
Zabur

B
Prophet Daudah
Prophet Musa
Prophet Isa
Prophet Muhammad.

a) Joseph of
Arimathea - Helped
Jesus to carry the cross
b) Simon Peter
- Betrayed Jesus
Christ.

- c) Judas Iscariot - Buried the body of Jesus Christ.
- d) Simon of Cyrene - Denied Jesus Christ.

Or: **Match the following correctly.**

25. Either: Name any four Christian holidays celebrated in Uganda.
 Or: Name any two rightly guided caliphs to prophet Muhammad.
 b) Mention two holy cities in Islam.

21. Either: a) Either where did Moses receive the ten commandments from?
 b) Which commandment reminds us to go to church every Sunday?
 c) Which commandment calls upon children to be obedient to teachers and elders?
 d) Which commandment prevents us from cheating in examinations? Or:
 Mention any four daily prayers of Moslems.

22. Either: a) Apart from Joseph, name any other two sons of Jacob. Or: a) Name at least two sons of prophet Muhammed.
 b) Name any two daughters of prophet Muhammed.

23. Either: a) State the first punishment God sent to the Egyptians.
 b) What was the last punishment God sent to the Egyptians.
 c) Name the brother of Moses who helped him to lead God's people out of Egypt.
 d) Who led the Israelites to the promised land?

Or: State the titles of the people who do the following duties.

- i) Leads prayer:
- ii) Calls Moslems for prayer.
- iii) Preaches in the Mosques.
- iv) Leads the Moslems in the country

24. Either: a) What do these names mean?

- i) Moses _____
- ii) Sarah _____ b)

Give two promises God made to Abraham.

Or: Give at least four prophets you know in Islam.

25. Either: a) Write two Christian names for boys.

- b) Write two Christian names for girls.
- Or: a) Write two Moslem names for boys.
- b) Write two Moslem names for girls.
- Either: a) What is a group of Christians called?
- b) Name any three Christian main sacraments.
- Or: a) What is the prayer of Muslims called?
- b) Name any three daily prayers in Islam.
26. Either: a) Give any two roles of the Christian Missionaries in Uganda.
- b) Write down any two Christian names you know.
- Or: Give any two duties of an Imam.
- b) Write down any male Islamic names you know.
27. Either: Name the prayer that Jesus Christ taught His disciples.
- b) List any three things that we ask for in the above mentioned prayer.
- Or: a) Name the prayer Muslims conduct after Ramadhan.
- b) List down three things Muslims avoid doing during Ramadhan 29.
- Either: a) What word is given to the bad acts against God?
- b) How do Christians overcome the mentioned word above in 26(a)?
- c) Give any two causes of the above mentioned word in 26(a) 30.
- Either: a) How did Abraham show his faith in God?
- b) Mention the wife Abraham.
- c) Write down any two promises God gave to Abraham.
- Or: a) How did prophet Ibrahim show his faith to Allah?
- b) Mention the wife of prophet Ibrahim.
- c) State any two promises Allah gave to prophet Ibrahim.
31. Either: a) Who is a disciple.
- b) Name any two disciples of Jesus Christ.
- c) Give one reason why Jesus had disciples.
- Or: a) Mention any two bad acts that the people of Mecca were involved in.
- Surat-al Hamuza.
- b) Give any two ways through which a Muslim should care for others in the community.

32. Either: a) In which form did the Holy Spirit appear to the apostles of Jesus on Pentecost day?

b) Mention any other symbol of the Holy Spirit apart from the one mentioned above.

c) Give any two roles of the Holy Spirit in the church today.

Or: a) Who was the first Muslim convert?

b) Mention any other early Moslem convert.

c) Give any two ways through which early Muslim converts suffered.

33. Either:

a) List down any three of the Ten Commandments.

b) Which group of people originally received the Ten Commandments? Or:

In which way was Muhammad related to the following people? a) Abu Talib

b) Khadijah

c) Abudallah

d) Abubaker

34. Either:

a) Write down any two selfish acts done by people in your society

b) Give any two unselfish acts done by people in your society.

Or:

a) What does the word Tayammum mean?

b) State any two conditions that can lead to Tayammum.

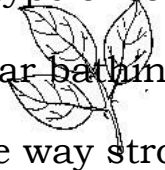
c) Give any one material that can be used for Tayammum.

For both

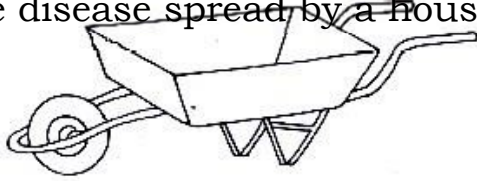
35. a) Write down any two similarities between Muslims and Christians.
c) List down two differences between Muslims and Christians.

**GARFIELD NURSERY AND PRIMARY SCHOOLS
P.5. ENGLISH REVISION WORK TWO
(ACTIVITY FOUR) 2020
SECTION A**

Section A (40 marks)

- 1) Name any one type of soil you know.
 - 2) How does regular bathing control the spread of skin diseases?
 - 3) Identify any one way strong wind can be dangerous to a crop farmer.
 - 4) Write any one common accident at school.
 - 5) How are the ears important to a person ?
 - 6) Give one way the part below is useful to a plant.
- 
- 7) Why is a balanced diet needed by every person?
 - 8) Identify any one way people take care of domestic animals at home.
 - 9) Give one way water sources can be contaminated.
 - 10) Draw and name any one item used to manage rainy weather.
 - 11) How can you keep proper personal hygiene?


- 12) In the space provided below, draw a diagram to show air has weight.
- 13) Mention any one way crop rotation is useful to farmers.
- 14) Why do people eat food?
- 15) How is the larva stage of a butterfly dangerous to crop farmers ?
- 16) Name any one disease spread by a housefly.



The diagram below is a garden tool. Use it to answer questions 17 and 18

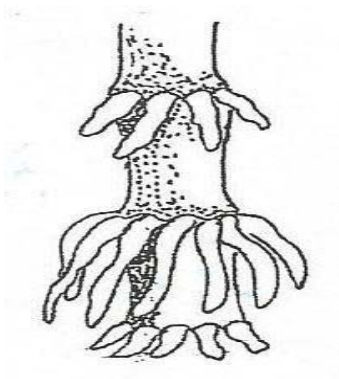
- 17) Identify one use of the above garden tool to people.
- 18) How can the above tool be cared for?
- 19) How do farmers benefit from nimbus clouds ?
- 20) With the help of a pencil, draw an arrow to show the part Used for flying.
- 21) State any one reason why first aid is given to casualties.
- 22) Draw and name any play material made from banana fibres.
- 23) Identify any one activity a farmer carries out during the wet season.
- 24) How are proteins important to human bodies ?
- 25) How are swamps useful to people ?
- 26) In which one way do people manage sunny weather?
- 27) Mention any one man made change in the environment.
- 28) Give any one danger of the animal shown below to farmers.





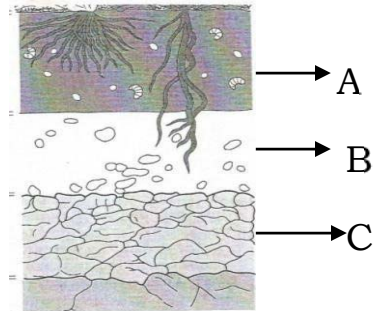
- 29) How are living components of soil important?
- 30) Give any one responsibility of a child at home.
- 31) Give a reason why a cow is grouped under living things.
- 32) How is a housefly able to spread faecal disease?
- 33) Write any one way you can care for the AIDS patients.
- 34) Give one way the sun can be used as a source of energy.
- 35) How are shadows formed?
- 36) In one sentence, write the meaning of the word transplanting .
- 37) Why is it a good practice to wash hands with clean water and soap after visiting a latrine?
- 38) Why are dehydrated people given ORS?
- 39) Name the component of air that supports burning.

- 40) Identify any one plant that has the roots shown below.



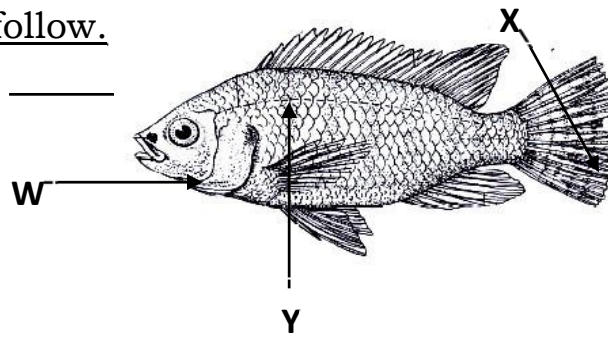
SECTION B. (60 marks)

41) The diagram below shows the arrangement of soil layers. Use it to answer the questions that follow:-



- a) Name the layers marked B and C.
 - b) Why is layer A usually black and dark ?
 - c) Describe any one way of keeping soil fertile .
- 42a) Briefly explain the term photosynthesis.
- b) How is chlorophyll useful in the above process.
 - c) Give a reason why plants are able to carry out photosynthesis during day time.
 - d) Name the food that is made during the process of photosynthesis.
- 43) What is air?
- b) Apart from carbon dioxide, give any other two components of air.
 - c) How is carbon dioxide useful in a soda factory ?
- 44) The diagram below shows a fish. Use it to answer the questions

that follow.



a) Name the parts labeled X and Y

b) How is part W useful to a fish?

c) Name the habitat of the above animal.

45) Germination is the growing of a seed into a seedling.

a) Write any two conditions needed for germination to take place.

b) Write any one example of a crop that undergoes the following types of germination:-

i) Epigeal germination.

ii) Hypogeal germination.

46a) Identify any two items we can use to promote good sanitation at we school.

b) Write any two activities a P.4 child can do to promote sanitation at school.

47) Match the garden tools to their uses correctly.

Garden tool

use

A hoe

watering plants

A rake

transplanting seedlings

A trowel

pruning

A watering can

collecting rubbish

A garden tool

weeding

Garden fool**use**

- a) A hoe
- b) A rake
- c) A watering can
- d) A trowel

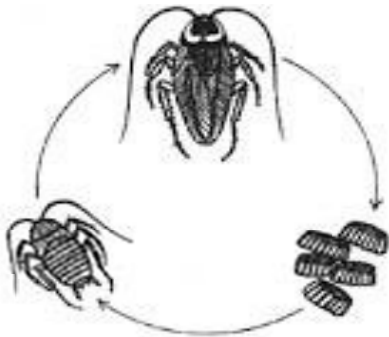
48) Why are bees grouped under social insects?

b) Apart from bees, give one other social insect.

c) How are bees useful to the following ;

i. people :

ii. plants : 49) Study the life cycle below and answer questions that follow:-



a) Name stage marked P.

b) Name the vector shown in the above lifecycle.

c) Write one disease spread by the above vector.

d) How can the disease mentioned in number (c) above be prevented?

50) Give the food value got from eating the following food

stuffs. i. Fish ii. pineapple

b) Write one use of food to the human body.

c) Identify one example of food that can be preserved by smoking .

51a) What name is given to moving air?

b) Given any two components of air.

c) Identify any one danger of air.

52a) A flower is a reproductive part of a plant. Draw the female part of a flower.

b) What happens to the following parts after fertilization?

i.

Ovary. ii.

Ovules

c) Why are some petals brightly coloured

53a) In one sentence , give the meaning of the term accident.

b) Give any two causes of accidents on Ugandan roads.

c) Mention one way in which the above causes can be prevented.

54a) Write any two causes of soil erosion.

b) How can erosion be controlled in a garden?

The steps below show a wrong order of making O.R.S. Rearrange them correctly.

1) Stir the mixture until the solutes dissolve.

2) Wash your hands with clean water and soap.

3) Measure 1 litre of drinking water into a clean container.

4) Measure eight levelled tea spoonfuls of sugar and one leveled tea spoonfuls of salt into the container.

55. (a) Briefly explain the term mulching.

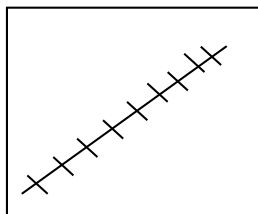
(b) Give two reasons why farmers mulch their gardens?

(c)How can mulching be a danger to crops in a garden

GARFIELD NURSERY AND PRIMARY SCHOOLS
P.5 SOCIAL STUDIES REVISION WORK TWO
(ACTIVITY FOUR) 2020
SECTION A

1. Mention one domestic animal kept for milk

2. Which official is responsible for promoting children's rights in the LC1 committee?
3. How can a family head promote peace among children?
4. As a P.4 child, give one way you benefit from P.E lessons.
5. How are people who live in towns important to farmers in villages?
6. Identify any one role of a child at home.
7. Which clouds are a clear sign of rain?
8. In the space below, draw the road sign for No Parking.
9. Which element is put on the map to help the map reader interpret map symbols?
10. Give one product got from timber.
11. State one problem faced by people living near lakes and rivers.
12. What does the map symbol below mean?




13. Why do people plant flowers in their compounds?
14. Which title is given to the political head of a country?
15. How can people care for their vehicles?
16. Give any one basic need of a man.
17. Name the type of electricity / energy got from the sun.
18. In which direction is the shadow seen when the sun is setting?
19. Why is it dangerous to dump wastes in water sources?
20. Give one value of forests to people.
21. Identify one method used to control soil erosion in hilly areas.
22. Which is the biggest lake in Uganda?
23. Name any one colour of the Uganda Nation Flag .
24. State the raw material for making clothes.
25. Give a reason why a storied building is called a permanent house.
26. Of what importance is a television to people at home?

27. How can trees in a compound at home be dangerous?
28. Which colour is used on a map to represent water bodies?
29. Mention one project a P.4 child can start at home.
30. Identify the component of a homestead where food is prepared from.
31. Where on the busy road should pedestrians cross from?
32. Give one importance of leaders in a community.
33. Draw and name one product got from animals skins and hides
34. Name one tribe in Uganda that carries out male circumcision.
35. State one importance of staying near a hospital.
36. Mention any one commercial bank in Uganda.
37. Write KCCA in full.
38. What problem will a P.4 child face while studying a map without a title?
39. Suggest any one way of saving electricity at home.
40. What do we call a shop that sells building materials?

SECTION B


41.
 - a) What does the term community mean?
 - b) Give any two examples of communities.
 - c) State one cause of misunderstandings among people in the community.
42. a) What does the road sign below represent?



- b) Give any one cause of road accidents.
 - c) State two dangers caused by road accidents.
43. a) Name the lake in Uganda that is the;
 - i. Source of salt.
 - ii. Most swampy.

- b) Give any two importance of lakes to people.
44. a) From which social service centre is education got?
- b) Apart from education, mention other two examples of social services.
- c) Mention one means of transport used on lakes.
45. a) Mention any two craft materials used to make playing objects
- b) Give the importance of the following craft product at home.
- i. Mingling stick
 - ii. Pot

46. a) State any two ways a market is an important place in our community.
- b) Apart from market places, give any other two important places in your district.
47. a) Identify one type of fish caught by people in your district.
- b) Give any two reasons why people in our district carry out fishing.
- c) What is the difference between a fisherman and a fishmonger?
48. a) Give any one example of children's rights.
- b) Give any two ways children's rights are violated in Uganda.
- c) State any one danger caused by child abuse to children
49. a) What does the term "map" mean?
- b) Draw the maps of the following pictures.



- c) How is a map important to travelers?
50. a) How are the following people important in our community
- i. Doctors
 - ii. Drivers
 - iii. Night watchmen
 - iv. Farmers
51. a) Draw and name two items used to manage rainy weather

- b) Which element of weather is good for:
 - i. Plant growth
 - ii. Winnowing
- 52. a) Give the similarity between Buvuma and Kalangala districts
- b) State any two importance of districts to people.²⁰²⁰
- c) What title is given to the political head of a district?
- 53. a) Which public holiday comes on 8th March every year?
- b) Mention two activities children do during school holidays
- c) How are holidays important to school children?
- 54. a) Give two ways the community benefits from a nearby School.
- b) Mention one cause of conflicts between a school and its neighbours.
- c) Why should schools be fenced?
- 55. a) What is a family?
- b) In which type of family do we find father, mother and their biological children only?
- c) Write down any two roles of a mother in a family

IGARFIELD NURSERY AND PRIMARY SCHOOLS

2020

